





Name \_\_\_\_\_ Date \_\_\_\_\_

As you work, use your math words *less than*.

<p>How many kites? <input type="text"/></p> 	<p>Draw a set of suns that has 1 less. How many suns? <input type="text"/></p>
<p>How many hot air balloons? <input type="text"/></p> 	<p>Draw a set of clouds that has 1 less. How many clouds? <input type="text"/></p>
<p>How many octopi? <input type="text"/></p> 	<p>Draw a set of sharks that has 1 less. How many sharks? <input type="text"/></p>
<p>How many chicks? <input type="text"/></p> 	<p>Draw a set of worms that has 1 less. How many worms? <input type="text"/></p>